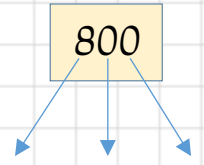
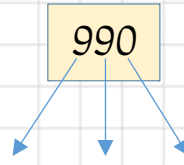
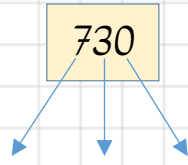
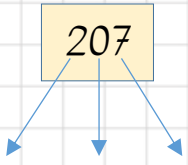
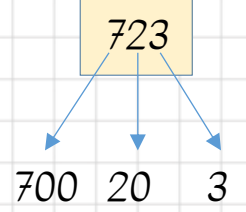
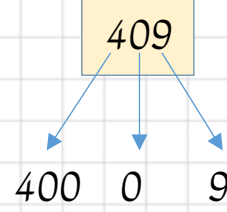
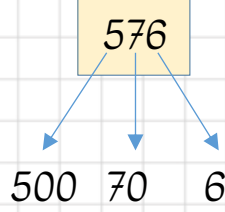
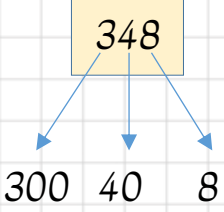


ÇÖZÜMLEME

Çözümleme: Bir sayıda bulunan rakamların basamak değerlerini toplamaktır.

Basamak Değeri: Bir sayıda bulunan rakamların bulunduğu basamakta ladiğı değerdir.

► Basamak değerlerini yazalım.



► Çözümleme yapalım.

842 = 8 yüzlük + 4 onluk + 2 birlik

$$800 + 40 + 2$$

563 = 5 yüzlük + 6 onluk + 3 birlik

$$500 + 60 + 3$$

124 = 1 yüzlük + 2 onluk + 4 birlik

$$100 + 20 + 4$$

409 = 4 yüzlük + 0 onluk + 9 birlik

$$400 + 0 + 9$$

